



Name _____ Date _____




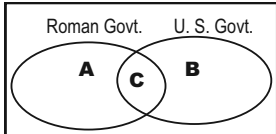




SOCIAL STUDIES DAILY REVIEW #22

HISTORY

GEOGRAPHY

CIVICS

ECONOMICS

M O N D A Y	<p>1. ¹What is the name of this building?</p> <p>a. Athena's Temple b. Agora Palazzo c. Pandora's Box d. Parthenon</p> <p>²In what country is it located?</p> 	<p>2. Is it land or is it water on the map? You can usually tell which it is by its—</p> <p>a. smell. b. sound. c. texture. d. color.</p>	<p>3. The pledge to the American flag is the—</p> <p>a. Allegiance to the Republic. b. Promise of Allegiance. c. Pledge of Allegiance. d. American Allegiance.</p> <p>Discuss: What is allegiance?</p>	<p>4. Why must people make economic choices?</p> <p>a. Resources, goods, and services are limited, or scarce. b. to avoid boredom c. The government makes them. d. Hard decisions make you smarter.</p>
T U E S D A Y	<p>1. What is this?</p>  <p>a. an aqueduct b. a causeway c. a tunnel d. a railroad bridge</p> <p>You can tell by its arches that _____ built it.</p>	<p>2. Which ancient civilizations used irrigation to water their crops?</p>  <p>a. Spain, England b. Rome, Greece c. China, Egypt d. China, Greece</p>	<p>3. What belongs BEST in Section C of the Venn diagram?</p>  <p>a. a president as leader b. only a few people vote c. republic d. direct democracy</p>	<p>4. Octavius was on his way to Rome to find a job. Which job did he most likely NOT see on the list?</p>  <p>HELP WANTED road builders farmers miners traders APPLY IN ROME</p>
W E D N E S D A Y	<p>1. ¹What is the name of this building?</p> <p>a. Caladium b. Colossus c. Colosseum d. Corinthian</p>  <p>²Where is it?</p>	<p>2. Because of the many mountains in Greece, there were—</p> <p>a. a lot of mountain goats. b. small, independent cities. c. many roads. d. winter ski resorts.</p>	<p>3. Greece had a form of government called a—</p> <p>a. representative democracy. b. interdependent democracy. c. specialization democracy. d. direct democracy.</p>	<p>4. Octavius got a job building an aqueduct. Water flowed through the aqueduct to water the crops. The crops were traded for other things.</p> <p>What kind of resource was Octavius?</p> <p>What was the natural resource?</p>
T H U R S D A Y	<p>1. Greek and Roman architecture is characterized by the _____ used on their buildings.</p> <p>a. vinyl siding b. paint c. sculpture d. scars</p> 	<p>2. Match.</p> <p>____ a. James River. ____ b. Rio Grande River. ____ c. Mississippi River. ____ d. Great Lakes.</p> 	<p>3. What kind of government did Rome have?</p> <p>a. colossal democracy b. direct democracy c. interdependent democracy d. representative democracy</p>	<p>4. Did these ancient workers provide services or goods? Write S for service or G for goods.</p> <p>____ a. farmers ____ b. shipbuilders ____ c. traders ____ d. road builders</p>



Name _____ Date _____

SOCIAL STUDIES DAILY REVIEW QUIZ #22

1. Based on designs of architecture, which ancient civilization does each of the following pictures represent?



a. _____ b. _____ c. _____ d. _____ e. _____

2. If you had lived in Greece, you would have gone to vote on every law or rule that was decided. This is because the government in Greece was a—

- a. people's democracy.
- b. representative democracy.
- c. direct democracy.
- d. special democracy.

3.

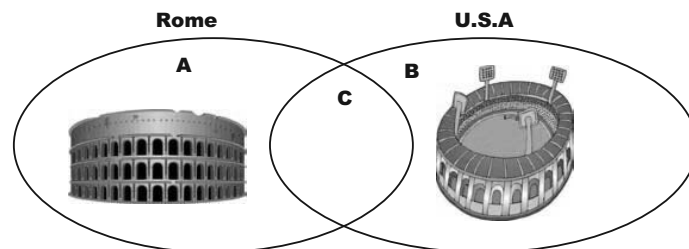
Well, Brutus, I bet you didn't know what a difficult job it is to build these roads!



Our roads are the best! But there are days when I wish I didn't live in _____.

4. Which characteristic of architecture from past civilizations belongs BEST in Section C of the Venn diagram?

- a. columns
- b. openings
- c. NFL player
- d. arches



5. Which number on the map shows the location of the—

- _____ a. Rio Grande River?
- _____ b. Mississippi River?
- _____ c. James River?
- _____ d. Great Lakes?

